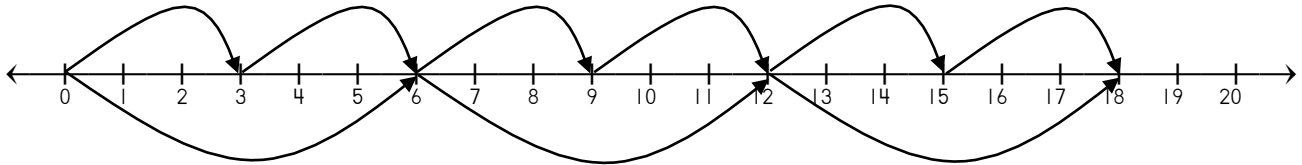


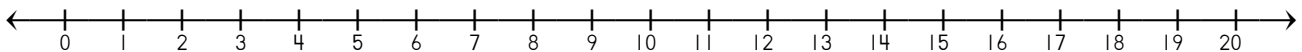
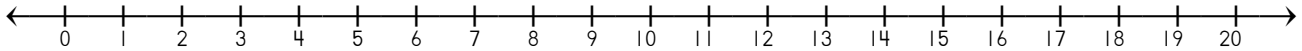
Name: \_\_\_\_\_ Date: \_\_\_\_\_

Kim showed the commutative property on a number line.

Which multiplication facts does she show?



Create two other examples of the commutative property with different multiplication facts. Show them on the number line.



Big Idea #38: Properties of Multiplication • Task 38B

Retrieved from the companion website for Mine The Gap for Mathematical Understanding: Common Holes and Misconceptions and What to Do About Them, Grades K-2 by John SanGiovanni. Thousand Oaks, CA: Corwin, www.corwin.com. Copyright © 2017 by Corwin. All rights reserved. Reproduction authorized only for the local school site or nonprofit organization that has purchased this book.