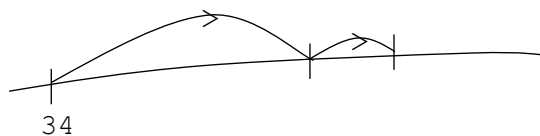



# Jump addition and subtraction worksheet

Name: \_\_\_\_\_

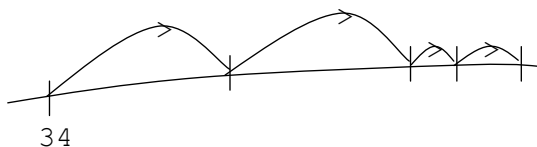
$$34 + 13$$



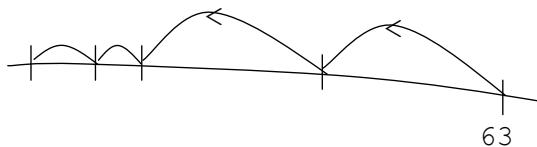
$$56 - 23$$



$$38 + 25$$



$$63 - 24$$



$$47 - 34 = \underline{\hspace{2cm}}$$



$$62 - 26 = \underline{\hspace{2cm}}$$

